


ARMY PUBLIC SCHOOL MIRAN SAHIB
WINTER BREAK HOLIDAYS HOMEWORK
SESSION-2023-24

CLASS IV

SUBJECT- ENGLISH

S.NO	SKILL	
1	READING	Read lesson- 7 Brave Rani Lakshmbai and Lesson -8 Birbal and the barber
2	WRITING	Practice the below given worksheet in your classwork notebook.
3	SPEAKING	<div style="text-align: center;">  <p>TALK for 1 MINUTE SPORT</p> <ol style="list-style-type: none"> 1. Talk about the most popular sport in the world. 2. Talk about your favorite sport. 3. Talk about winter sports. 4. Talk about jogging. 5. Talk about why many people like sport. 6. Talk about the most expensive sport. 7. Talk about sports you would like to try. 8. Talk about a sport that you don't like. 9. Talk about the most dangerous sport. 10. Talk about what you do to keep fit. 11. Talk about popular sports in your country. 12. Talk about your favorite sport star. 13. Talk about sports you played as a child. 14. Talk about money in sports. 15. Talk about the hardest sports in the world. </div> <p>Make a video while describing any one of the most popular sport from the above mentioned sports.</p>

WORK -SHEET -5 MARKS

Do as Directed

1. Something that will happen in the time before now. Name the tense.
2. You (should / would) take medicines regularly. [**Choose the correct modal**]
3. The girl tells a lie. [**Change into simple past tense**]
4. The boys were playing cricket. [**Change into simple future tense**]
5. They will go to Paris with their friends. [**Underline simple future tense**]
6. There is a glass _ (in/on) the table. [**Choose the correct preposition**]
7. My house is _____ the post office. [**fill in the preposition**]
8. May God bless you. [**Underline the modal**]
9. He _____(know) that he will be late for school. [**Fill with simple past tense**]
10. The lady went ___ road. [**Fill in the blanks with preposition**]

\

SUBJECT- HINDI

कक्षा : चौथी

क्रम संख्या	कौशल		अंक
१.	परियोजना कार्य लेखन	<ul style="list-style-type: none">• केरल राज्य से संबंधित जानकारी एकत्रित कर A4 शीट पर कोलाज (चित्रों का संग्रह) बनाएँ • अपनी कार्यपुस्तिका पर दस पृष्ठ सुलेख लिखें 	५
२.	पठन	<ul style="list-style-type: none">• बीरबल की बुद्धिमत्ता पर एक कहानी कक्षा में सुनाने के लिए याद करें 	५
३.	पुनरावृत्ति आवधिक परीक्षा – २	<ul style="list-style-type: none">• आवधिक परीक्षा – दो का पाठ्यक्रम दोहराएँ 	


कार्यपत्रिका (५)

निम्नलिखित वाक्यों में उचित विराम – चिह्न लगाएँ-

१. राधा घर जा रही है
२. वाह कितना सुंदर फूल है
३. बालिका धीरे धीरे चल रही है
४. रीना शोभित सीता और मीना फुटबॉल मैच देखने जाएँगे
५. तुम कहाँ जा रहे हो
६. हँसो मत रोओ
८. वे हँसते गाते घर चले गए
८. आकाश में तारे चमक रहे हैं

SUBJECT – MATHEMATICS

CLASS IV

S.NO	SKILL	TOPIC	MARKS
1	WRITING	<ul style="list-style-type: none">• Do the attached worksheet on math's notebook.• Learn and write tables from 2 to 15 on separate notebook.• Revise syllabus of Periodic Test-II Examination	10
2	SUBJECT ENRICHMENT ACTIVITY	<p>Make a working model of clock using cardboard, number sticker, colour paper, colour pen, paper cutter, glue stick etc.</p> <p>Link:- https://youtu.be/T9Oz7jg4EGs?si=_HIXOLITaPYflEhC</p> 	5

WORKSHEET

1. Write the following decimal in words.

1026.70 _____

2. Complete the series: 11.4, 21.5, 31.6, 41.7, ____, ____, ____, ____

3. Express as proper or improper fractions. 1.45

4. Convert the following:

a) 2 kL 5 daL into millilitres

b) 55 quintals into kilograms

5. Which is more: 8 packets of juice measuring 250 mL or 10 packets of juice measuring 180 mL.

6. Fill in the blanks:-

a) A polygon having six line segments is called a _____.

b) A quadrilateral has _____ sides.

c) A _____ curve starts and ends at the same point

d) The _____ is the longest chord of the circle.

e) The radius is _____ of the diameter.

7. Find the diameter of the circle if its radius is 12 cm.

8. Write the letters of the English alphabet

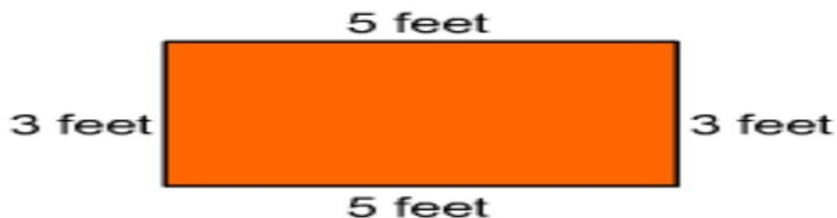
a) with vertical symmetry

b) with horizontal symmetry

c) with both vertical and horizontal symmetry

9. Find the area of the rectangle whose length is 15 m and breadth is 12 m.

10. What is the perimeter and area of the given figure?



SUBJECT – EVS

CLASS IV

A.ACTIVITY:- Make a Brochure on Our Monuments and Heritage of Jammu and Kashmir

The Brochure should consist the monuments of Jammu and Kashmir.

Paste the picture and write down the information .Make the decorative cover page of it Our Monuments and Heritage of Jammu and Kashmir must include the following :-

- 1.Mubarak Mandi
- 2.Kheer Bhawani.
- 3.Hari Niwas
- 4.Bahu Fort 5.Amar Palace 6.Ranbireshwar Temple7.Peer Kho
- 8.Shukrala Temple
- 9.Mata Vaishno Devi Temple
- 10.Hazrat Bal

B. Revise syllabus of Periodic -2



SUBJECT - COMPUTER

CLASS IV

- **ACTIVITY 1: (Marks 05)**
 - i. **Draw the Sprite on the Notebook and write its functions and also write how to add more sprite on scratch window.**
- **ACTIVITY 2: (Marks 05)**
 - ii. **On a Coloured sheet write about the types of Scratch block Shapes and write one line on it.**

Note: After completing the activities paste it in your computer notebook.

General Knowledge

1. Note down the names of the gold medalists of India in Asian Games 2023 and also mention their respective sport.
2. Revise PT2 syllabus